








## Level 2 Practice Test 2020

1. Choose a word from the box that identifies the note or rest. Write the number of beats each receives in 4/4 time.

|   |       |                  |
|---|-------|------------------|
|  | _____ | gets _____ beats |
|  | _____ | gets _____ beats |
|  | _____ | gets _____ beats |
|  | _____ | gets _____ beat  |
|  | _____ | gets _____ beats |


|                  |
|------------------|
| quarter rest     |
| half rest        |
| whole note       |
| whole rest       |
| dotted half note |

2. Write the correct beats/counts under each note for counting the measures below. Note the 3/4 time signature.

**3/4**  |  |  |  ||







**3/4**  |  |  |  ||

3. Write the correct letter name for **EACH** note below.


  
 \_\_\_\_\_

  
 \_\_\_\_\_

4. A. Write the **number of beats** each note or rest receives in **4/4 time**.

 = \_\_\_\_\_   
  = \_\_\_\_\_   
  = \_\_\_\_\_   
  = \_\_\_\_\_  
 = \_\_\_\_\_   
  = \_\_\_\_\_

B. The name of this note,  is a \_\_\_\_\_ note.

The name of this note,  is a \_\_\_\_\_ note.

The name of this rest,  is a \_\_\_\_\_ rest

- |             |
|-------------|
| quarter     |
| half        |
| whole       |
| dotted half |













5. Circle the measures with intervals of a **SECOND**.

6. Draw a **FLAT** on the staff in front of each note. (Be careful to draw flat on the correct line or space.)

7. Draw a **SHARP** on the staff in front of each note. (Be careful to draw sharp on the correct line or space.)

8. Write the correct beats/counts under each note for counting the measures below. Note the **4/4** time signature.

$\frac{4}{4}$   |   |   |   |  |  - |  .  ||

$\frac{4}{4}$      |  .  |    |  |   ||

9. Circle the measures with intervals of a **THIRD**.



10. Match the musical signs with the definition by writing the letter in the space provided.

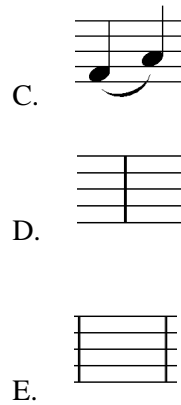
\_\_\_\_\_ tied notes      \_\_\_\_\_ slur

\_\_\_\_\_ bar line      \_\_\_\_\_ Grand staff

\_\_\_\_\_ repeat



\_\_\_\_\_ barline  
 \_\_\_\_\_ grand staff  
 \_\_\_\_\_ measure  
 \_\_\_\_\_ slur  
 \_\_\_\_\_ tie



11. Add **five whole notes** to complete this C major scale.

