



Level 2 Practice Test 2017-2020

1. Choose a word from the box that identifies the note or rest. Write the number of beats each receives in 4/4 time.



gets _____ beats



gets _____ beats



gets _____ beats



gets _____ beat



gets _____ beats

quarter rest
half rest
whole note
whole rest
dotted half note




2. Write the correct beats/counts under each note for counting the measures below. Note the 3/4 time signature.




3. Write the correct letter name for EACH note below.

4. A. Write the **number of beats** each note or rest receives in **4/4 time**.

 = _____  = _____  = _____  = _____

 = _____  = _____  = _____


B. The name of this note,  is a _____ note.

The name of this note,  is a _____ note.


The name of this rest,  is a _____ rest

- | |
|-------------|
| quarter |
| half |
| whole |
| dotted half |

5. Circle the measures with intervals of a **SECOND**.




6. Draw a **FLAT** on the staff in front of each note. (Be careful to draw flat on the correct line or space.)



7. Draw a **SHARP** on the staff in front of each note. (Be careful to draw sharp on the correct line or space.)



8. Write the correct beats/counts under each note for counting the measures below. Note the **4/4** time signature.



9. Circle the measures with intervals of a **THIRD**.



10. Match the musical signs with the definition by writing the letter in the space provided.

_____ tied notes _____ slur

_____ bar line _____ Grand staff

_____ repeat

A.




B.



C.



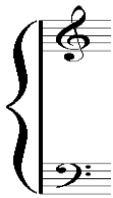
D.



E.



A.



_____ barline

_____ grand staff

_____ measure

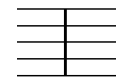
_____ slur

_____ tie


C.



D.



E.



11. Add **five whole notes** to complete this C major scale.

